

# Assessment Cadet Formations and Symbols

Name \_\_\_\_\_

Place the following cadet units in order from the smallest to the largest unit:

Platoon      Brigade      Squad      Battalion      Company

\_\_\_\_\_

Match the following cadet positions with the correct symbol

**Position**

**Symbol**

01. \_\_\_\_\_ Squad Member

02. \_\_\_\_\_ Squad Leader

03. \_\_\_\_\_ Platoon Sergeant

04. \_\_\_\_\_ First Sergenat

05. \_\_\_\_\_ Command Sergenat Major

06. \_\_\_\_\_ Platoon Leader

07. \_\_\_\_\_ Executive Officer












08. \_\_\_\_\_ Company Commander

09. \_\_\_\_\_ Battalion Commander

10. \_\_\_\_\_ Brigade Commander

11. \_\_\_\_\_ Guidon

12. \_\_\_\_\_ Flag Bearer

A.		G	
B.		H	
C.		I	
D.		J	
E.		K	
F.		L	